

STUDY GUIDE FOR GRADES 3 - 6 MUSIC TEST (revised 1/19/12)


Name _____ Date _____

D G F F I H M M K B B J J C Q Q D A

1. Place the letter A under the whole note or notes. [Do not simply memorize the letters. Instead, learn what terms the letters stand for. On the actual test paper the letters may be in a different order.]
2. Place the letter B under the sixteenth note or notes.
3. Place the letter C under the dotted half note or notes.
4. Place the letter D under the quarter note or notes.
5. Place the letter Q under the dotted quarter note or notes.
6. Place the letter F under the eighth note or notes.
7. Place the letter G under the half note or notes.
8. Place the letter H under the half rest or rests.
9. Place the letter I under the quarter rest or rests.
10. Place the letter J under the sixteenth rest or rests.
11. Place the letter K under the whole rest or rests.
12. Place the letter M under the eighth rest or rests.
13. Circle the tied notes.

14. **double bar line**

What means "the section ends"?



15. **measures** or **bars**

What do musicians call the space between the bar lines?

15B. **measures** or **bars**

Give the second answer for #15 if you know it.

16. **counts** or **beats**

What are the imaginary numbers in each measure?

16B. **counts** or **beats**

Give the second answer for #16 if you know it.

17. **time signature**

What are the two numbers on top of each other

at the beginning of a song? $\frac{4}{4}$ $\frac{2}{4}$ $\frac{3}{4}$ $\frac{6}{8}$

18. **top** Which number of the time signature tells how many counts per measure?


19. **one** Quarter notes and quarter rests get how many beats?



20. **three** Dotted half notes get how many beats?



21. **two** Half notes and half rests get how many beats?



22. **one-half** Eighth notes and eighth rests get how many beats?



23. **one and one-half** Dotted quarter notes get how many beats?



24. **four** Whole notes and whole rests get how many beats?





STUDY GUIDE FOR GRADES 3 - 6 MUSIC TEST (revised 1/19/12)

Name _____ Date _____

D G F F I H M M K B B J J C Q Q D A

1. Place the letter A under the whole note or notes. [Do not simply memorize the letters. Instead, learn what terms the letters stand for. On the actual test paper the letters may be in a different order.]
2. Place the letter B under the sixteenth note or notes.
3. Place the letter C under the dotted half note or notes.
4. Place the letter D under the quarter note or notes.
5. Place the letter Q under the dotted quarter note or notes.
6. Place the letter F under the eighth note or notes.
7. Place the letter G under the half note or notes.
8. Place the letter H under the half rest or rests.
9. Place the letter I under the quarter rest or rests.
10. Place the letter J under the sixteenth rest or rests.
11. Place the letter K under the whole rest or rests.
12. Place the letter M under the eighth rest or rests.
13. Circle the tied notes.

14. **double bar line** What means "the section ends"? 
15. **measures or bars** What do musicians call the space between the bar lines?
- 15B. **measures or bars** Give the second answer for #15 if you know it.
16. **counts or beats** What are the imaginary numbers in each measure?
- 16B. **counts or beats** Give the second answer for #16 if you know it.
17. **time signature** What are the two numbers on top of each other
at the beginning of a song? 

18. **top** Which number of the time signature tells how many counts per measure?


19. **one** Quarter notes and quarter rests get how many beats?



20. **three** Dotted half notes get how many beats?



21. **two** Half notes and half rests get how many beats?



22. **one-half** Eighth notes and eighth rests get how many beats?



23. **one and one-half** Dotted quarter notes get how many beats?



24. **four** Whole notes and whole rests get how many beats?



STUDY GUIDE FOR GRADES 3 - 6 MUSIC TEST (revised 1/19/12)


Name _____ Date _____

D G F F I H M M K B B J J C Q Q D A

1. Place the letter A under the whole note or notes. [Do not simply memorize the letters. Instead, learn what terms the letters stand for. On the actual test paper the letters may be in a different order.]
2. Place the letter B under the sixteenth note or notes.
3. Place the letter C under the dotted half note or notes.
4. Place the letter D under the quarter note or notes.
5. Place the letter Q under the dotted quarter note or notes.
6. Place the letter F under the eighth note or notes.
7. Place the letter G under the half note or notes.
8. Place the letter H under the half rest or rests.
9. Place the letter I under the quarter rest or rests.
10. Place the letter J under the sixteenth rest or rests.
11. Place the letter K under the whole rest or rests.
12. Place the letter M under the eighth rest or rests.
13. Circle the tied notes.

14. **double bar line**

What means "the section ends"?



15. **measures or bars**

What do musicians call the space between the bar lines?

15B. **measures or bars**

Give the second answer for #15 if you know it.

16. **counts or beats**

What are the imaginary numbers in each measure?

16B. **counts or beats**


Give the second answer for #16 if you know it.


17. **time signature**


What are the two numbers on top of each other


at the beginning of a song? $\frac{4}{4}$ $\frac{2}{4}$ $\frac{3}{4}$ $\frac{6}{8}$


18. **top** Which number of the time signature tells how many counts per measure?


19. **one** Quarter notes and quarter rests get how many beats? 

20. **three** Dotted half notes get how many beats? 

21. **two** Half notes and half rests get how many beats? 

22. **one-half** Eighth notes and eighth rests get how many beats? 

23. **one and one-half** Dotted quarter notes get how many beats? 



24. **four** Whole notes and whole rests get how many beats? 

STUDY GUIDE FOR GRADES 3 - 6 MUSIC TEST (revised 1/19/12)

Name _____ Date _____

D G F F I H M M K B B J J C Q Q D A

1. Place the letter A under the whole note or notes. [Do not simply memorize the letters. Instead, learn what terms the letters stand for. On the actual test paper the letters may be in a different order.]
2. Place the letter B under the sixteenth note or notes.
3. Place the letter C under the dotted half note or notes.
4. Place the letter D under the quarter note or notes.
5. Place the letter Q under the dotted quarter note or notes.
6. Place the letter F under the eighth note or notes.
7. Place the letter G under the half note or notes.
8. Place the letter H under the half rest or rests.
9. Place the letter I under the quarter rest or rests.
10. Place the letter J under the sixteenth rest or rests.
11. Place the letter K under the whole rest or rests.
12. Place the letter M under the eighth rest or rests.
13. Circle the tied notes.

14. **double bar line** What means "the section ends"? 
15. **measures or bars** What do musicians call the space between the bar lines?
- 15B. **measures or bars** Give the second answer for #15 if you know it.
16. **counts or beats** What are the imaginary numbers in each measure?
- 16B. **counts or beats** Give the second answer for #16 if you know it.
17. **time signature** What are the two numbers on top of each other
at the beginning of a song? 

18. **top** Which number of the time signature tells how many counts per measure?


19. **one** Quarter notes and quarter rests get how many beats?



20. **three** Dotted half notes get how many beats?



21. **two** Half notes and half rests get how many beats?



22. **one-half** Eighth notes and eighth rests get how many beats?



23. **one and one-half** Dotted quarter notes get how many beats?



24. **four** Whole notes and whole rests get how many beats?





STUDY GUIDE FOR GRADES 3 - 6 MUSIC TEST (revised 1/19/12)

Name _____ Date _____

D G F F I H M M K B B J J C Q Q D A

1. Place the letter A under the whole note or notes. [Do not simply memorize the letters. Instead, learn what terms the letters stand for. On the actual test paper the letters may be in a different order.]
2. Place the letter B under the sixteenth note or notes.
3. Place the letter C under the dotted half note or notes.
4. Place the letter D under the quarter note or notes.
5. Place the letter Q under the dotted quarter note or notes.
6. Place the letter F under the eighth note or notes.
7. Place the letter G under the half note or notes.
8. Place the letter H under the half rest or rests.
9. Place the letter I under the quarter rest or rests.
10. Place the letter J under the sixteenth rest or rests.
11. Place the letter K under the whole rest or rests.
12. Place the letter M under the eighth rest or rests.
13. Circle the tied notes.

14. **double bar line** What means "the section ends"? 
15. **measures or bars** What do musicians call the space between the bar lines?
- 15B. **measures or bars** Give the second answer for #15 if you know it.
16. **counts or beats** What are the imaginary numbers in each measure?
- 16B. **counts or beats** Give the second answer for #16 if you know it.
17. **time signature** What are the two numbers on top of each other
at the beginning of a song? 

18. **top** Which number of the time signature tells how many counts per measure?


19. **one** Quarter notes and quarter rests get how many beats?



20. **three** Dotted half notes get how many beats?



21. **two** Half notes and half rests get how many beats?



22. **one-half** Eighth notes and eighth rests get how many beats?



23. **one and one-half** Dotted quarter notes get how many beats?



24. **four** Whole notes and whole rests get how many beats?



STUDY GUIDE FOR GRADES 3 - 6 MUSIC TEST (revised 1/19/12)


Name _____ Date _____

D G F F I H M M K B B J J C Q Q D A

1. Place the letter A under the whole note or notes. [Do not simply memorize the letters. Instead, learn what terms the letters stand for. On the actual test paper the letters may be in a different order.]
2. Place the letter B under the sixteenth note or notes.
3. Place the letter C under the dotted half note or notes.
4. Place the letter D under the quarter note or notes.
5. Place the letter Q under the dotted quarter note or notes.
6. Place the letter F under the eighth note or notes.
7. Place the letter G under the half note or notes.
8. Place the letter H under the half rest or rests.
9. Place the letter I under the quarter rest or rests.
10. Place the letter J under the sixteenth rest or rests.
11. Place the letter K under the whole rest or rests.
12. Place the letter M under the eighth rest or rests.
13. Circle the tied notes.

14. **double bar line**

What means "the section ends"?



15. **measures** or **bars**

What do musicians call the space between the bar lines?

15B. **measures** or **bars**

Give the second answer for #15 if you know it.

16. **counts** or **beats**

What are the imaginary numbers in each measure?

16B. **counts** or **beats**


Give the second answer for #16 if you know it.


17. **time signature**


What are the two numbers on top of each other


at the beginning of a song? $\frac{4}{4}$ $\frac{2}{4}$ $\frac{3}{4}$ $\frac{6}{8}$


18. **top** Which number of the time signature tells how many counts per measure?


19. **one** Quarter notes and quarter rests get how many beats? 

20. **three** Dotted half notes get how many beats? 

21. **two** Half notes and half rests get how many beats? 

22. **one-half** Eighth notes and eighth rests get how many beats? 

23. **one and one-half** Dotted quarter notes get how many beats? 



24. **four** Whole notes and whole rests get how many beats? 

STUDY GUIDE FOR GRADES 3 - 6 MUSIC TEST (revised 1/19/12)

Name _____ Date _____

D G F F I H M M K B B J J C Q Q D A

1. Place the letter A under the whole note or notes. [Do not simply memorize the letters. Instead, learn what terms the letters stand for. On the actual test paper the letters may be in a different order.]
2. Place the letter B under the sixteenth note or notes.
3. Place the letter C under the dotted half note or notes.
4. Place the letter D under the quarter note or notes.
5. Place the letter Q under the dotted quarter note or notes.
6. Place the letter F under the eighth note or notes.
7. Place the letter G under the half note or notes.
8. Place the letter H under the half rest or rests.
9. Place the letter I under the quarter rest or rests.
10. Place the letter J under the sixteenth rest or rests.
11. Place the letter K under the whole rest or rests.
12. Place the letter M under the eighth rest or rests.
13. Circle the tied notes.

14. **double bar line** What means "the section ends"? 
15. **measures or bars** What do musicians call the space between the bar lines?
- 15B. **measures or bars** Give the second answer for #15 if you know it.
16. **counts or beats** What are the imaginary numbers in each measure?
- 16B. **counts or beats** Give the second answer for #16 if you know it.
17. **time signature** What are the two numbers on top of each other
at the beginning of a song? 

18. **top** Which number of the time signature tells how many counts per measure?


19. **one** Quarter notes and quarter rests get how many beats?



20. **three** Dotted half notes get how many beats?



21. **two** Half notes and half rests get how many beats?



22. **one-half** Eighth notes and eighth rests get how many beats?



23. **one and one-half** Dotted quarter notes get how many beats?



24. **four** Whole notes and whole rests get how many beats?

